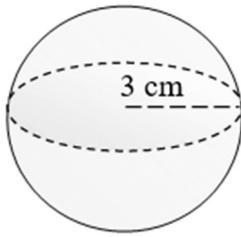


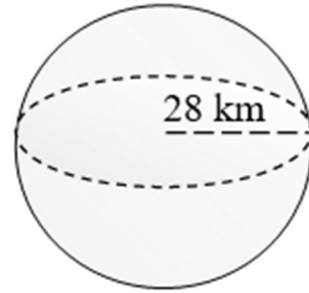
Volumen 3: esferas

1)



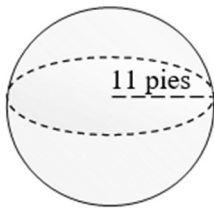
Volumen: _____

2)



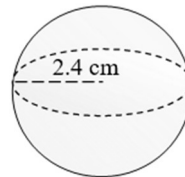
Volumen: _____

3)



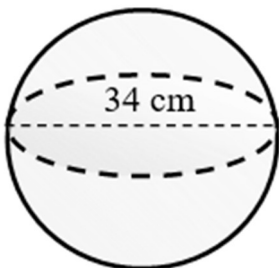
Volumen: _____

4)



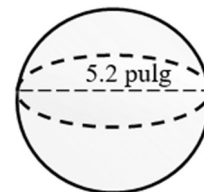
Volumen: _____

5)



Volumen: _____

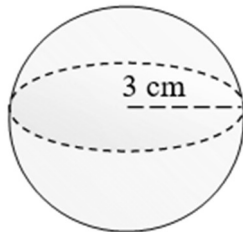
6)



Volumen: _____

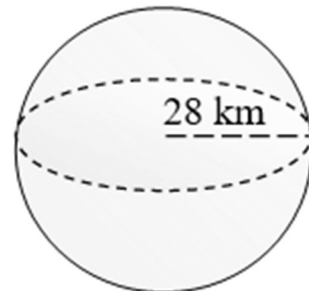
Volumen 3: esferas

1)



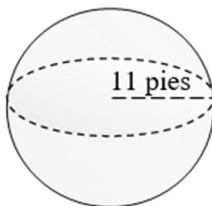
Volumen: 113.1 cm³

2)



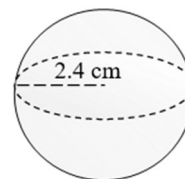
Volumen: 91952.32 km³

3)



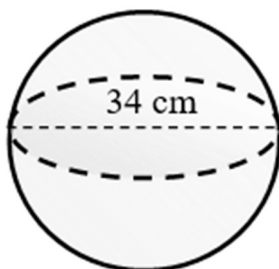
Volumen: 5575.28 pies³

4)



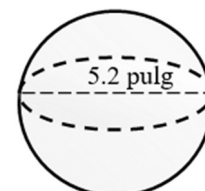
Volumen: 57.91 cm³

5)



Volumen: 20579.5 cm³

6)



Volumen: 73.62 pulg³