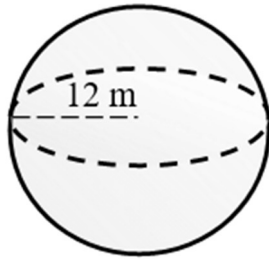


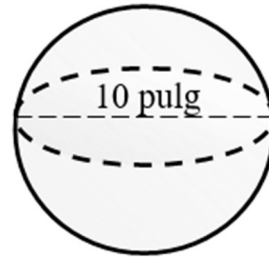
Volumen 3: esferas

1)



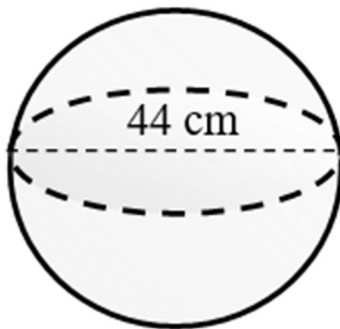
Volumen: _____

2)



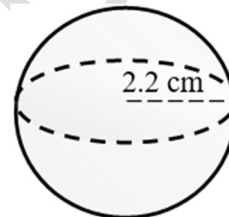
Volumen: _____

3)



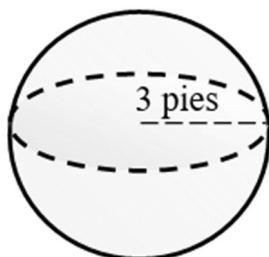
Volumen: _____

4)



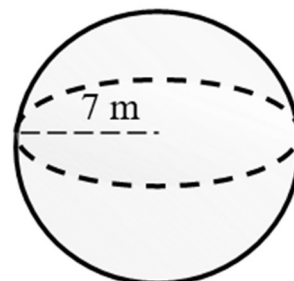
Volumen: _____

5)



Volumen: _____

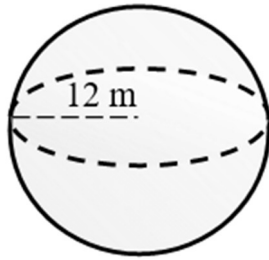
6)



Volumen: _____

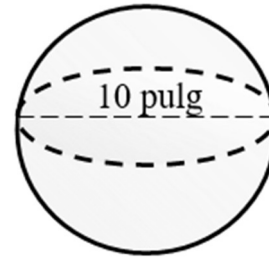
Volumen 3: esferas

1)



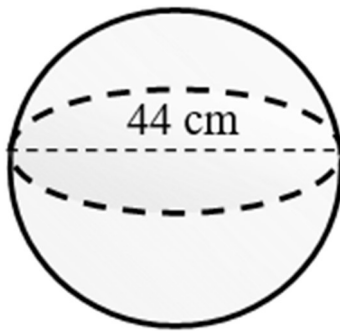
Volumen: 7238.23 m³

2)



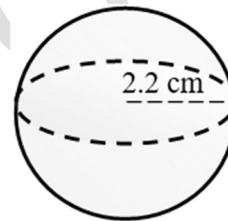
Volumen: 523.6 pulg³

3)



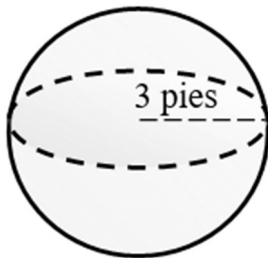
Volumen: 44602.24 cm³

4)



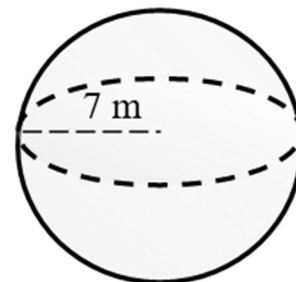
Volumen: 44.6 cm³

5)



Volumen: 113.1 pies³

6)



Volumen: 1436.76 m³