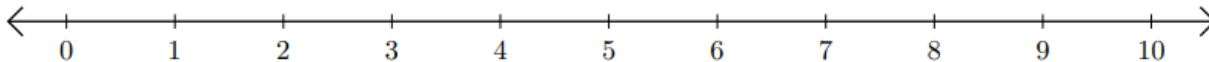


# Recta numérica: Sumar y Restar

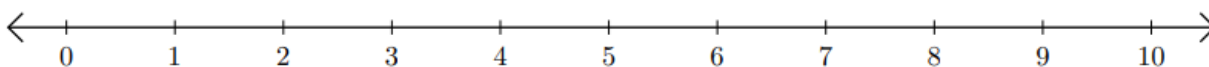
HSEPREP.COM

HSEPREP@GMAIL.COM

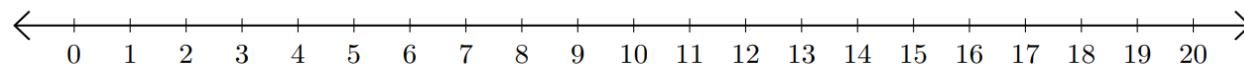
1)  $4 + 3 =$  \_\_\_\_\_



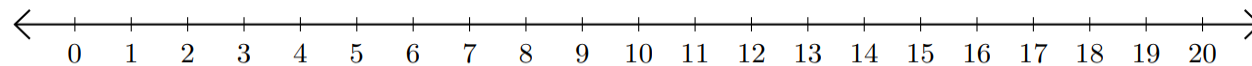
2)  $8 - 5 =$  \_\_\_\_\_



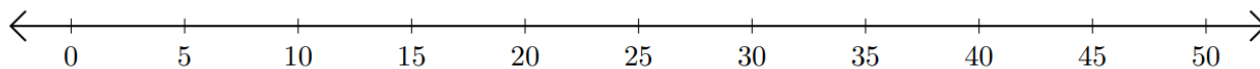
3)  $13 + 2 =$  \_\_\_\_\_



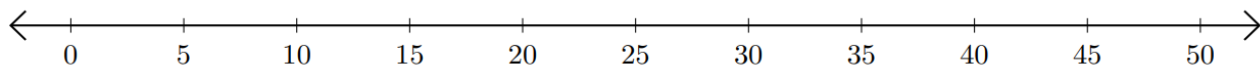
4)  $16 - 10 =$  \_\_\_\_\_



5)  $10 + 25 =$  \_\_\_\_\_



6)  $50 - 25 =$  \_\_\_\_\_



HSEPREP.COM

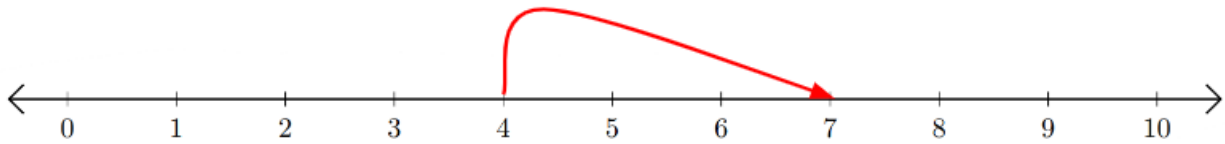
HSEPREP@GMAIL.COM

# Recta numérica: Sumar y Restar

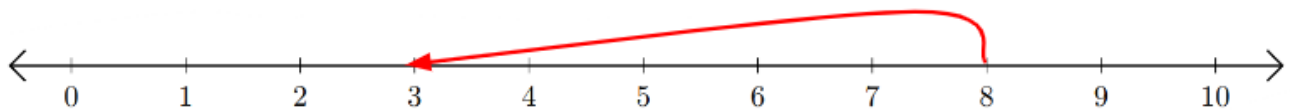
HSEPREP.COM

HSEPREP@GMAIL.COM

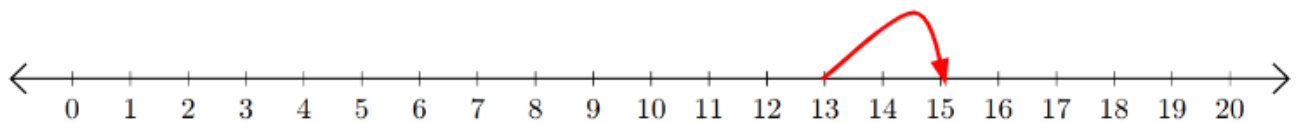
1)  $4 + 3 = \underline{7}$



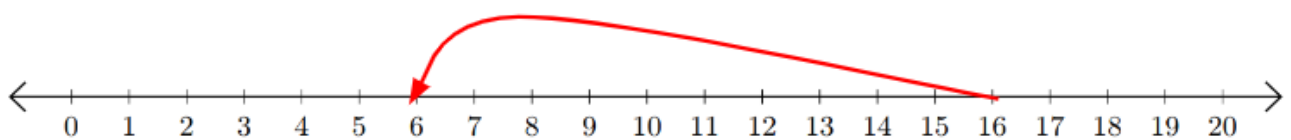
2)  $8 - 5 = \underline{3}$



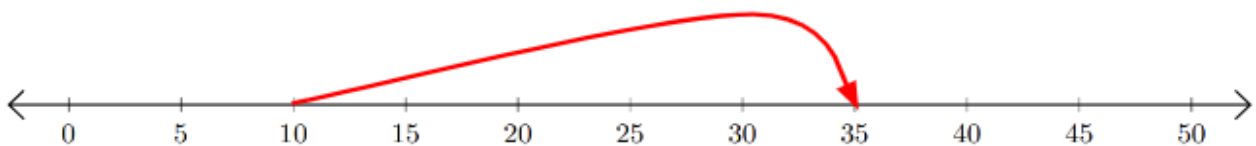
3)  $13 + 2 = \underline{15}$



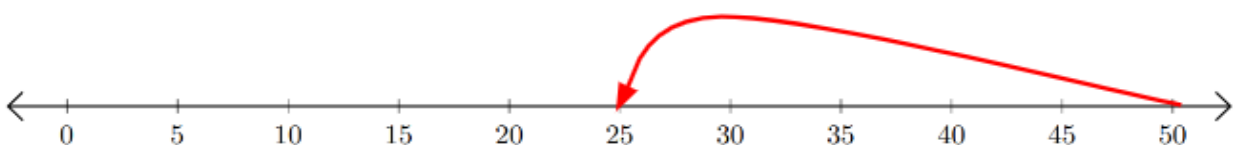
4)  $16 - 10 = \underline{6}$



5)  $10 + 25 = \underline{35}$



6)  $50 - 25 = \underline{25}$



HSEPREP.COM

HSEPREP@GMAIL.COM