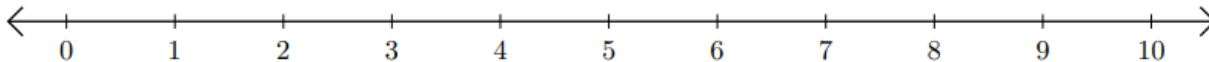
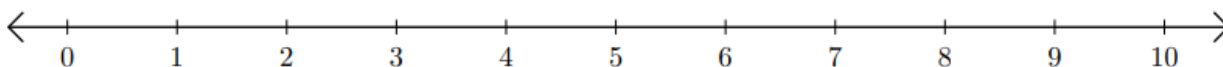


Recta numérica: Sumar y Restar

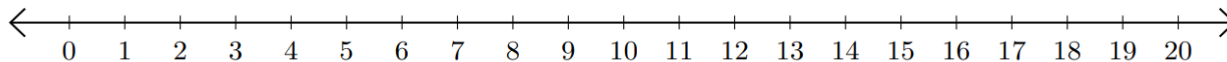
1) $1 + 4 =$ _____



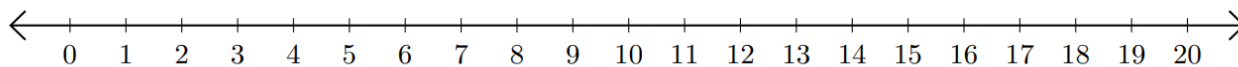
2) $8 - 6 =$ _____



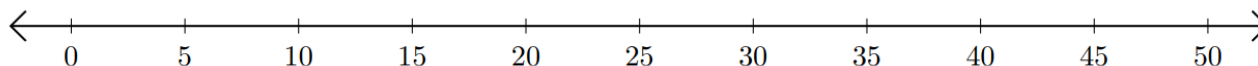
3) $11 + 4 =$ _____



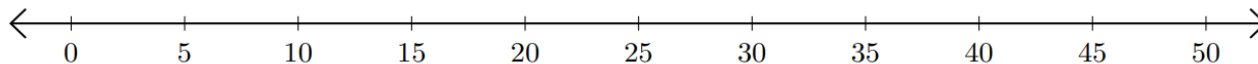
4) $15 - 12 =$ _____



5) $15 + 30 =$ _____



6) $50 - 45 =$ _____

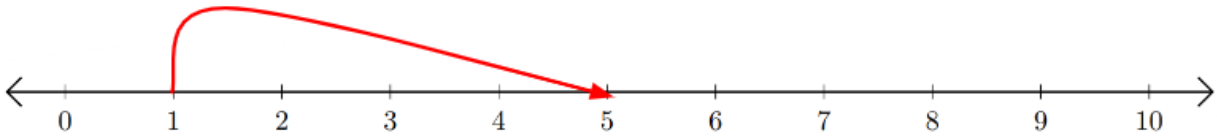


Recta numérica: Sumar y Restar

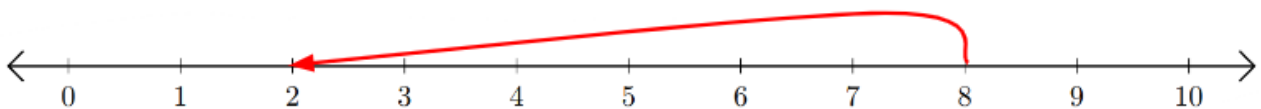
HSEPREP.COM

HSEPREP@GMAIL.COM

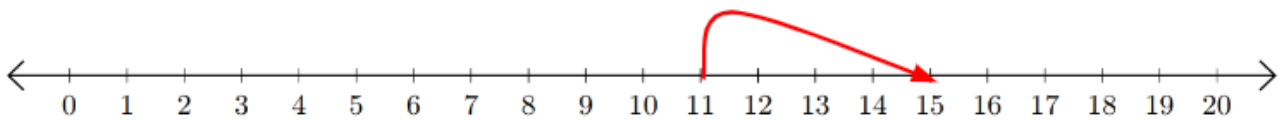
1) $1 + 4 = \underline{5}$



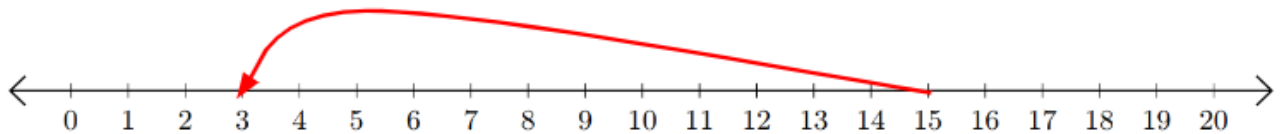
2) $8 - 6 = \underline{2}$



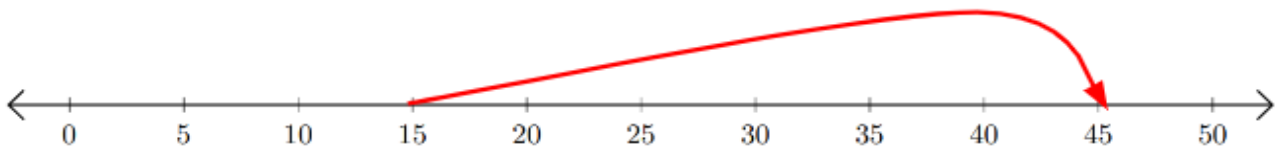
3) $11 + 4 = \underline{15}$



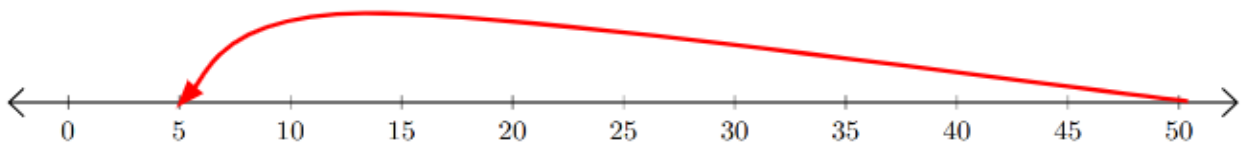
4) $15 - 12 = \underline{3}$



5) $15 + 30 = \underline{45}$



6) $50 - 45 = \underline{5}$



HSEPREP.COM

HSEPREP@GMAIL.COM