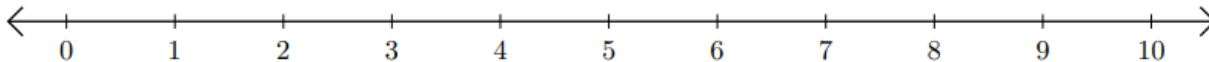
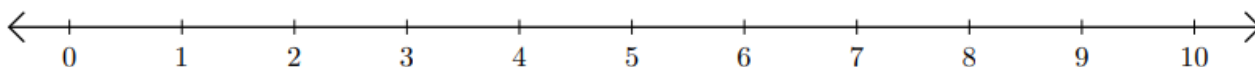


Recta numérica: Sumar y Restar

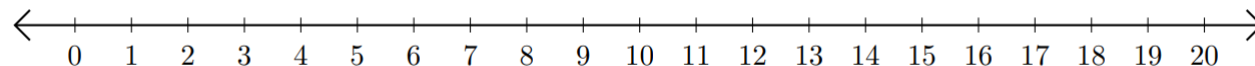
1) $9 + 1 =$ _____



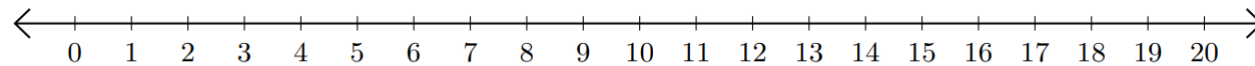
2) $7 - 5 =$ _____



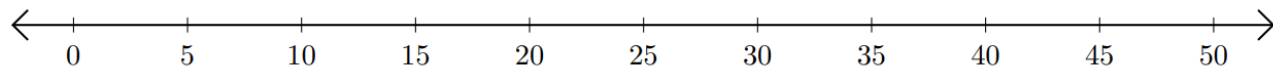
3) $16 + 3 =$ _____



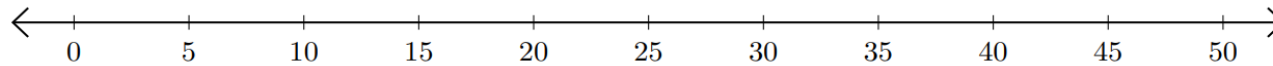
4) $12 - 8 =$ _____



5) $20 + 20 =$ _____



6) $50 - 15 =$ _____

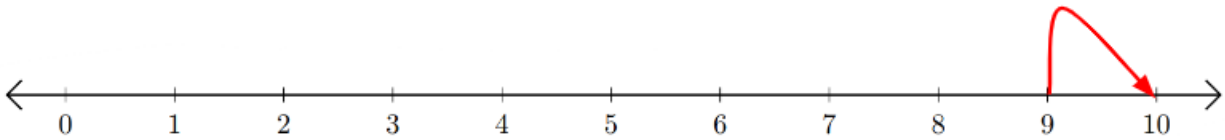


Recta numérica: Sumar y Restar

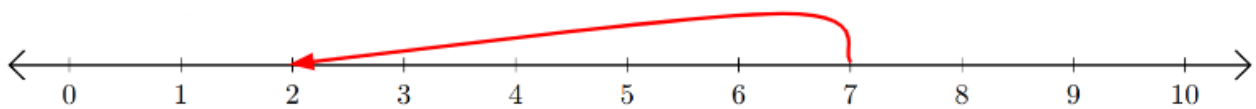
HSEPREP.COM

HSEPREP@GMAIL.COM

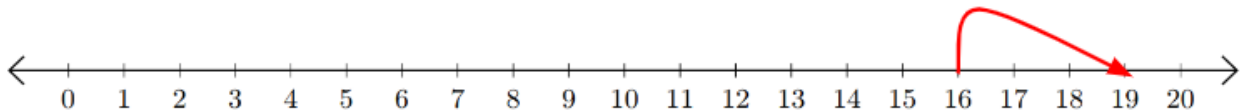
1) $9 + 1 = \underline{10}$



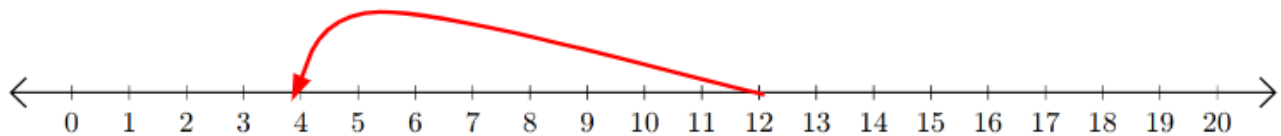
2) $7 - 5 = \underline{2}$



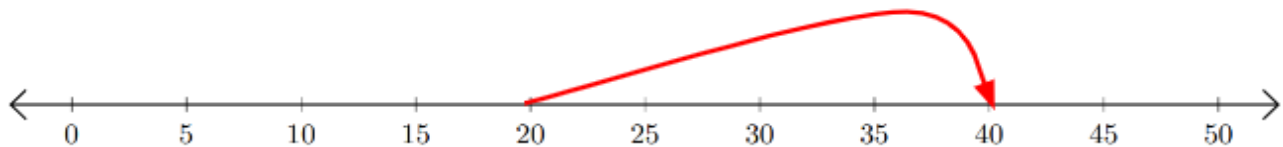
3) $16 + 3 = \underline{19}$



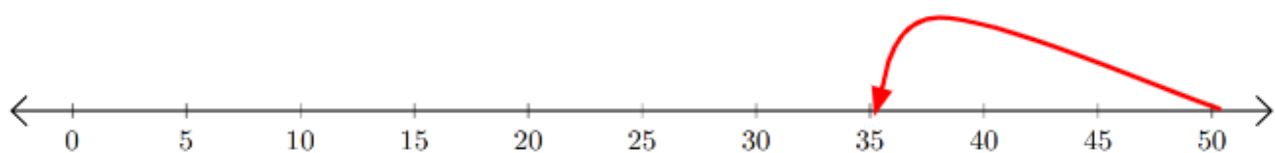
4) $12 - 8 = \underline{4}$



5) $20 + 20 = \underline{40}$



6) $50 - 15 = \underline{35}$



HSEPREP.COM

HSEPREP@GMAIL.COM