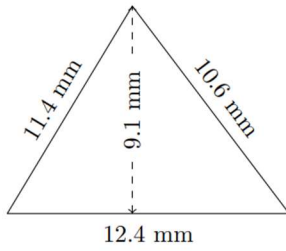


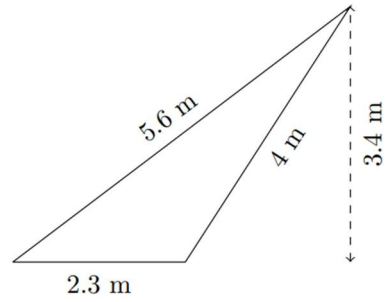
Perímetro: Triángulos

1)



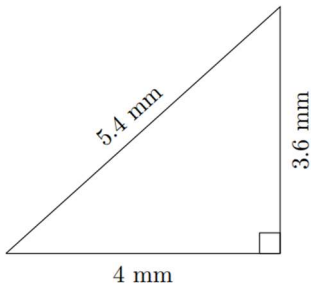
Perímetro: _____

2)



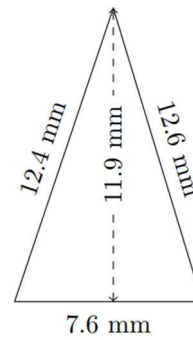
Perímetro: _____

3)



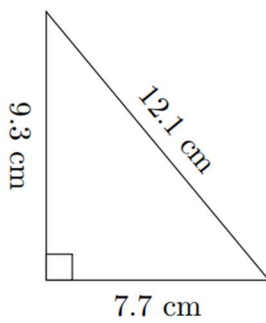
Perímetro: _____

4)



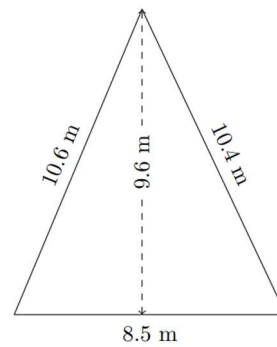
Perímetro: _____

5)



Perímetro: _____

6)



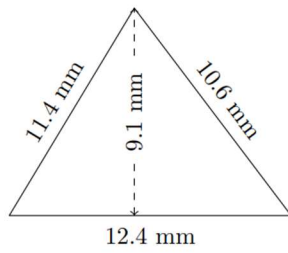
Perímetro: _____

Perímetro: Triángulos

HSEPREP.COM

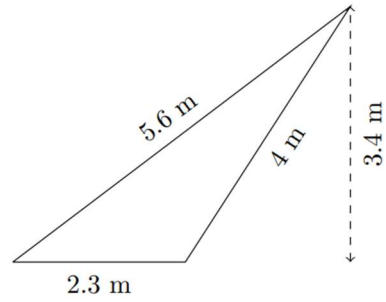
HSEPREP@GMAIL.COM

1)



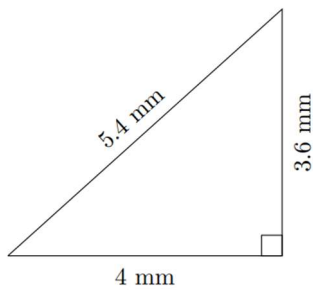
Perímetro: 34.4 mm

2)



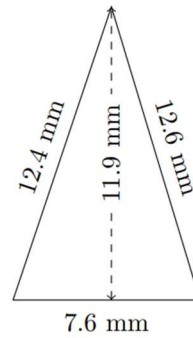
Perímetro: 11.9 m

3)



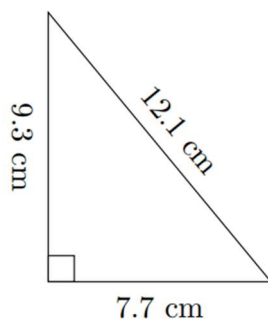
Perímetro: 13 mm

4)



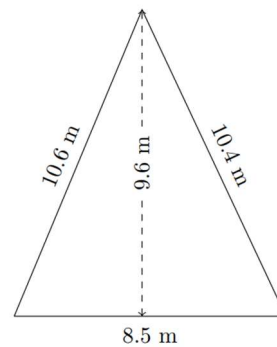
Perímetro: 32.6 mm

5)



Perímetro: 29.1 cm

6)



Perímetro: 29.5 m