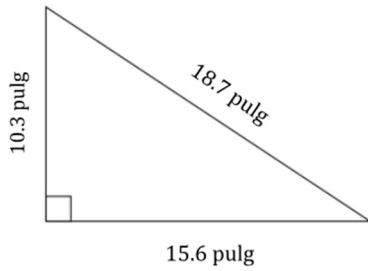


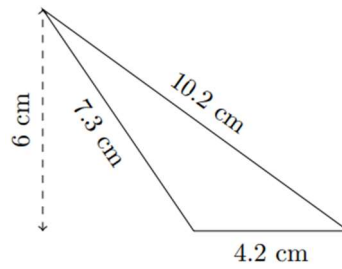
Perímetro: Triángulos

1)



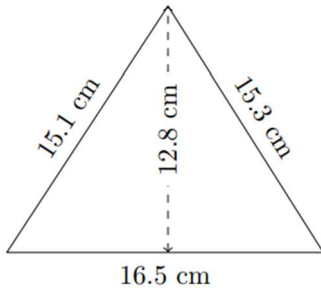
Perímetro: _____

2)



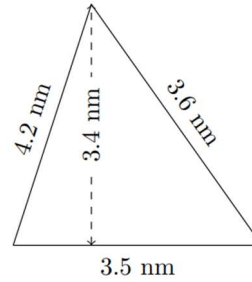
Perímetro: _____

3)



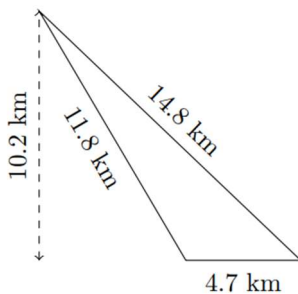
Perímetro: _____

4)



Perímetro: _____

5)



Perímetro: _____

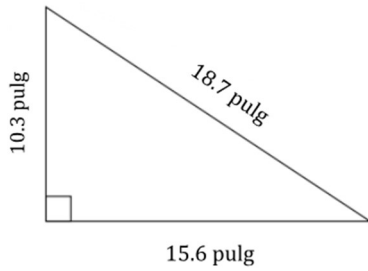
6)



Perímetro: _____

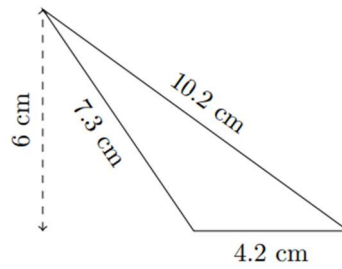
Perímetro: Triángulos

1)



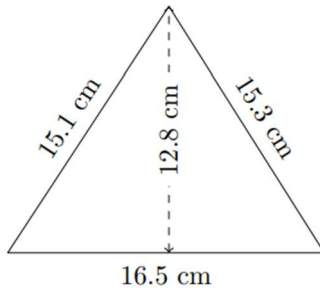
Perímetro: 80.34 pulg

2)



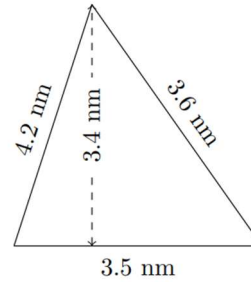
Perímetro: 21.7 cm

3)



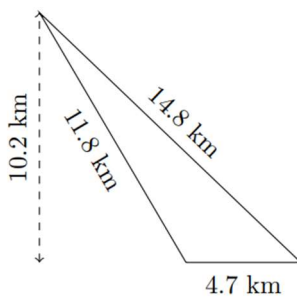
Perímetro: 46.9 cm

4)



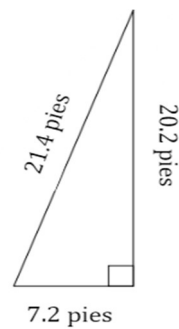
Perímetro: 11.3 mm

5)



Perímetro: 31.3 km

6)



Perímetro: 48.8 pies