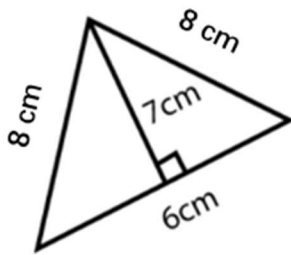


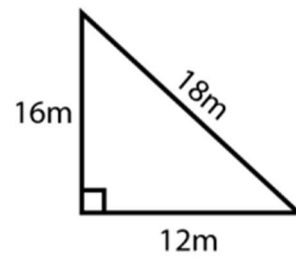
Perímetro: Triángulos

1)



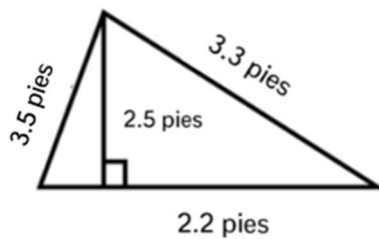
Perímetro: _____

2)



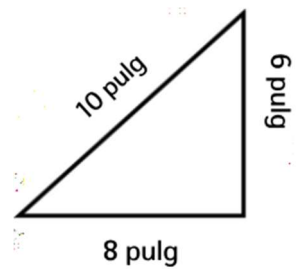
Perímetro: _____

3)



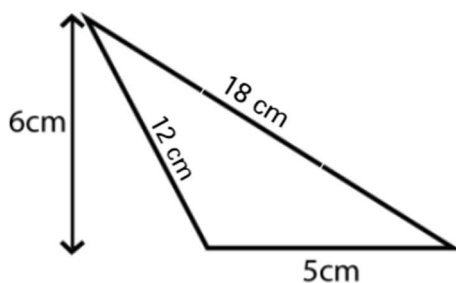
Perímetro: _____

4)



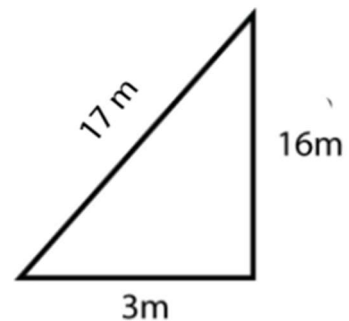
Perímetro: _____

5)



Perímetro: _____

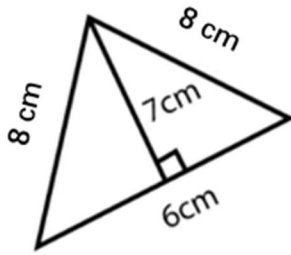
6)



Perímetro: _____

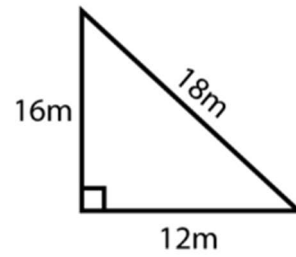
Perímetro: Triángulos

1)



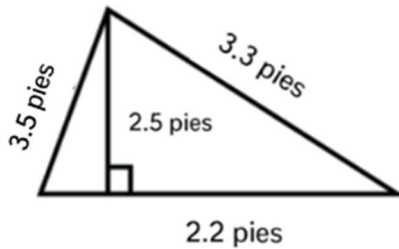
Perímetro: 22 cm

2)



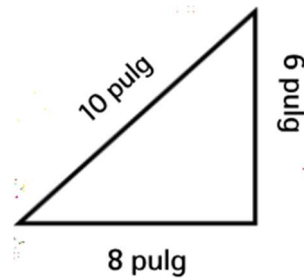
Perímetro: 46 m

3)



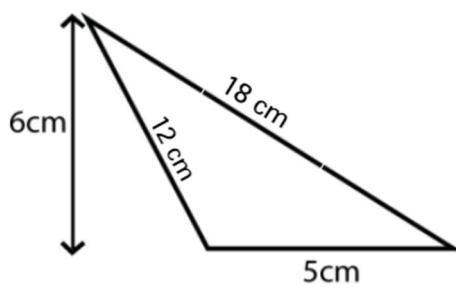
Perímetro: 9 pies

4)



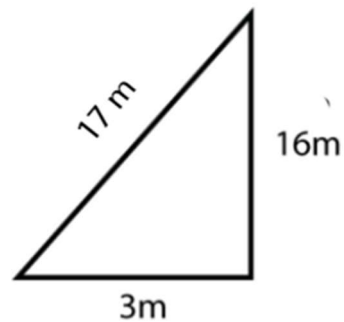
Perímetro: 24 pulg

5)



Perímetro: 35 cm

6)



Perímetro: 36 m