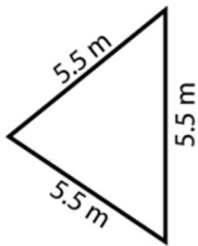


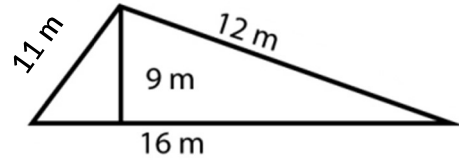
Perímetro: Triángulos

1)



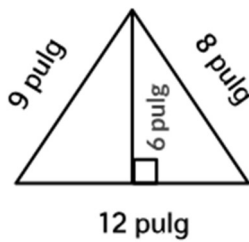
Perímetro: _____

2)



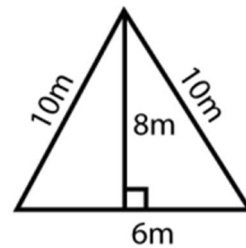
Perímetro: _____

3)



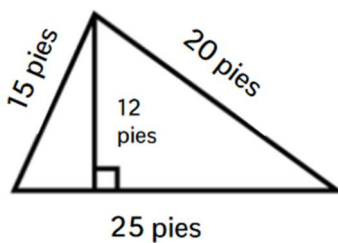
Perímetro: _____

4)



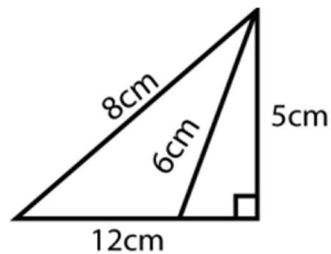
Perímetro: _____

5)



Perímetro: _____

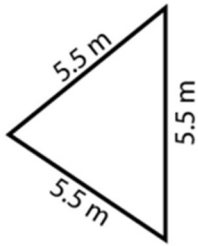
6)



Perímetro: _____

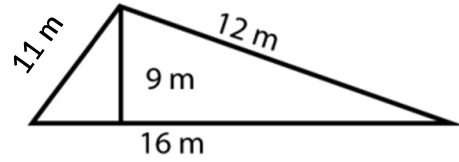
Perímetro: Triángulos

1)



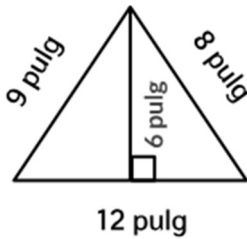
Perímetro: 16.5 m

2)



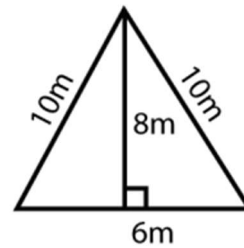
Perímetro: 39 m

3)



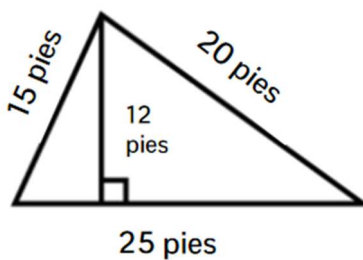
Perímetro: 29 pulg

4)



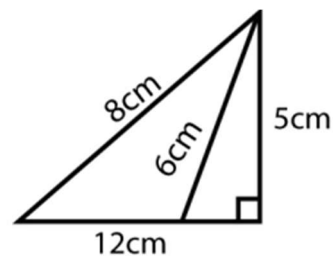
Perímetro: 26 m

5)



Perímetro: 60 pies

6)



Perímetro: 25 cm