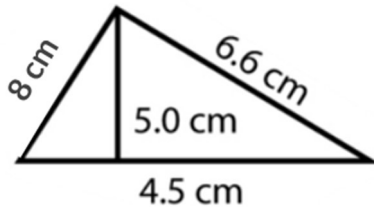


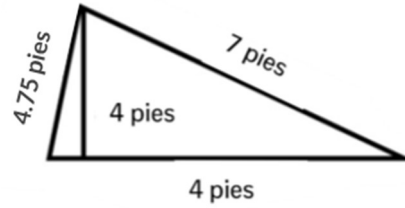
Perímetro: Triángulos

1)



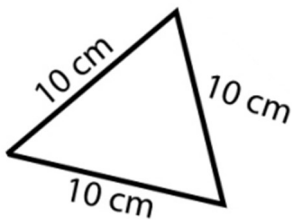
Perímetro: _____

2)



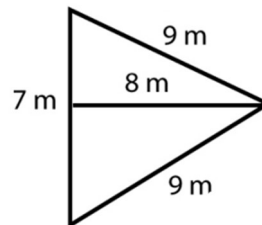
Perímetro: _____

3)



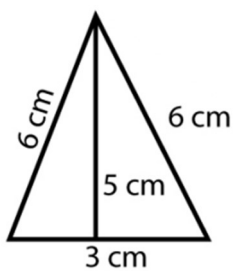
Perímetro: _____

4)



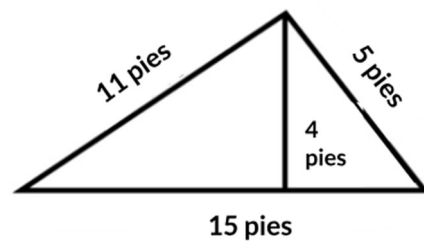
Perímetro: _____

5)



Perímetro: _____

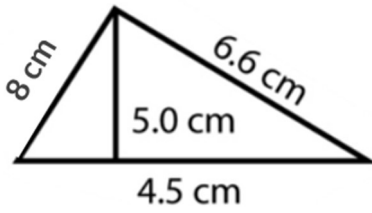
6)



Perímetro: _____

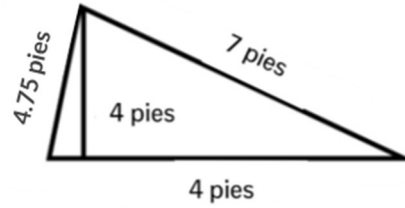
Perímetro: Triángulos

1)



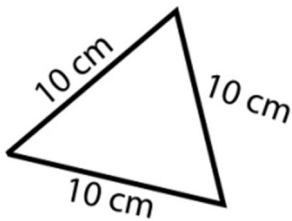
Perímetro: 19.1 cm

2)



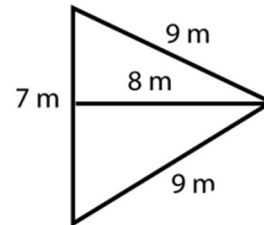
Perímetro: 15.75 pies

3)



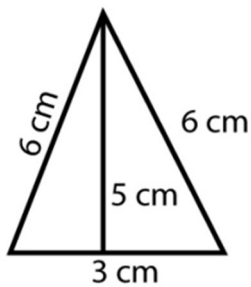
Perímetro: 30 cm

4)



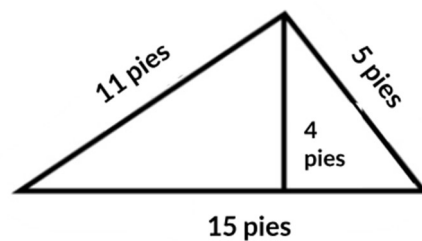
Perímetro: 25 m

5)



Perímetro: 15 cm

6)



Perímetro: 31 pies