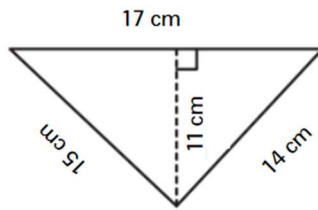


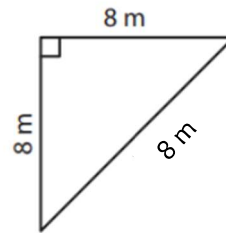
Perímetro: Triángulos

1)



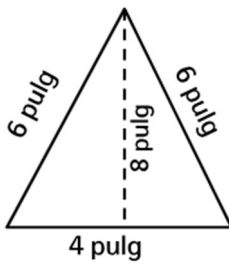
Perímetro: _____

2)



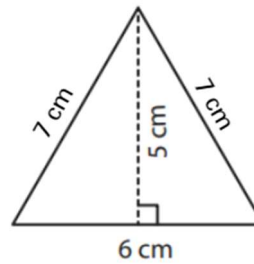
Perímetro: _____

3)



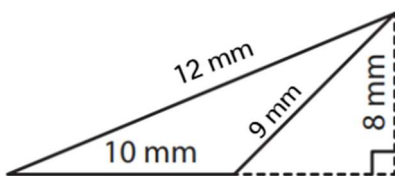
Perímetro: _____

4)



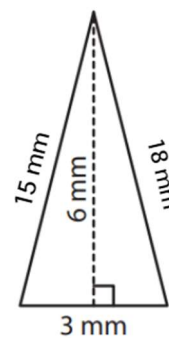
Perímetro: _____

5)



Perímetro: _____

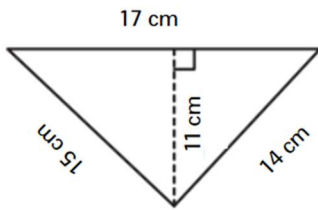
6)



Perímetro: _____

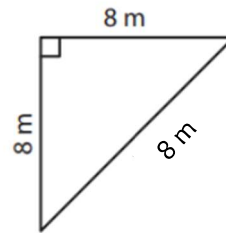
Perímetro: Triángulos

1)



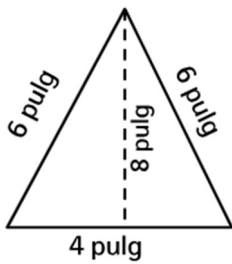
Perímetro: 46 cm

2)



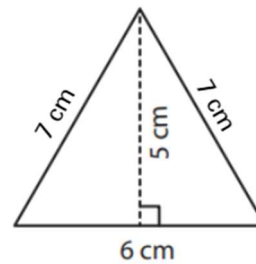
Perímetro: 24 m

3)



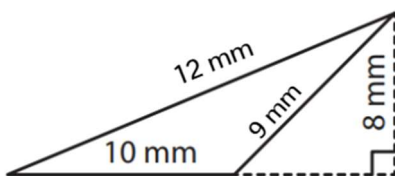
Perímetro: 16 pulg

4)



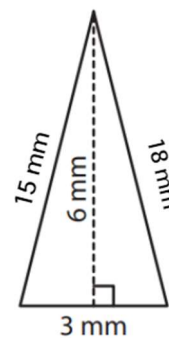
Perímetro: 20 cm

5)



Perímetro: 31 mm

6)



Perímetro: 36 mm