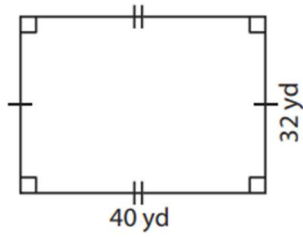


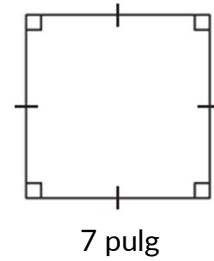
Perímetro: Cuadriláteros

1)



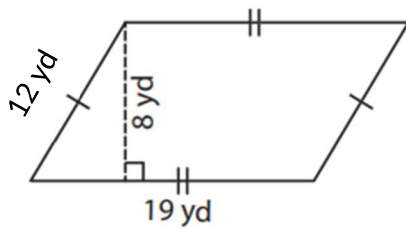
Perímetro: _____

2)



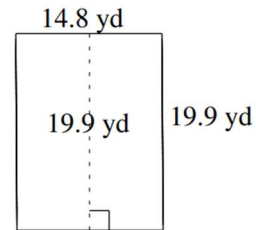
Perímetro: _____

3)



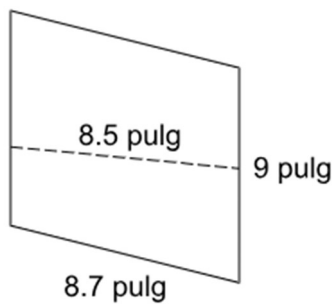
Perímetro: _____

4)



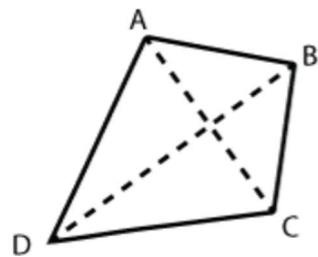
Perímetro: _____

5)



Perímetro: _____

6)



AC = 6 pies, BD = 10 pies

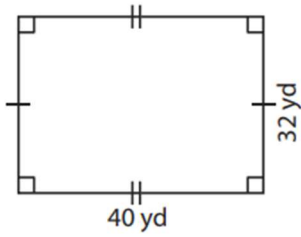
AD = 7 pies, DC = 6 pies,

BC = 5 pies, AB = 4 pies

Perímetro: _____

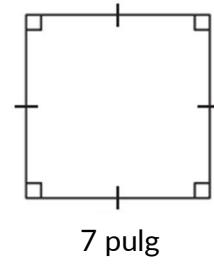
Perímetro: Cuadriláteros

1)



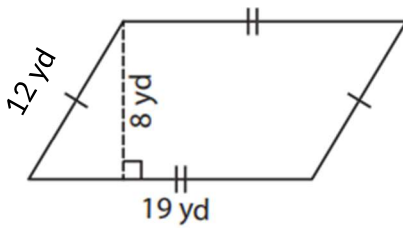
Perímetro: 144 yd

2)



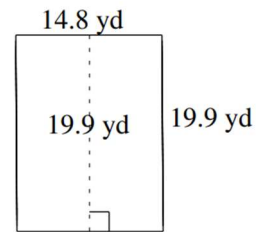
Perímetro: 28 pulg

3)



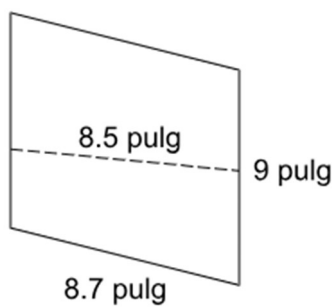
Perímetro: 62 yd

4)



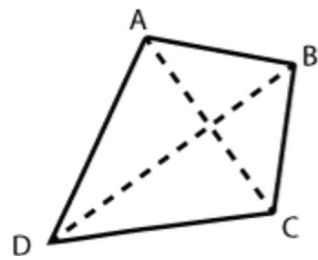
Perímetro: 69.4 yd

5)



Perímetro: 35.4 pulg

6)



AC = 6 pies, BD = 10 pies

AD = 7 pies, DC = 6 pies,

BC = 5 pies, AB = 4 pies

Perímetro: 22 pies