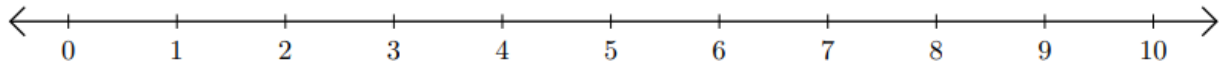


Number Line: Addition and Subtraction

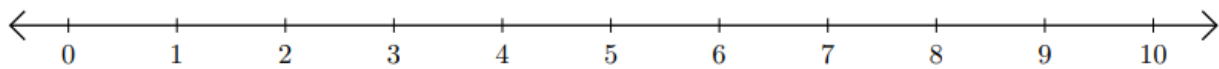
HSEPREP.COM

HSEPREP@GMAIL.COM

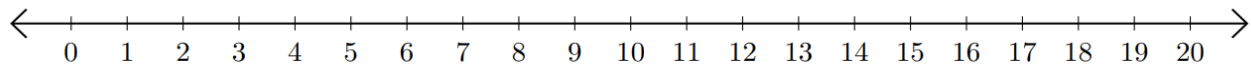
1) $4 + 3 =$ _____



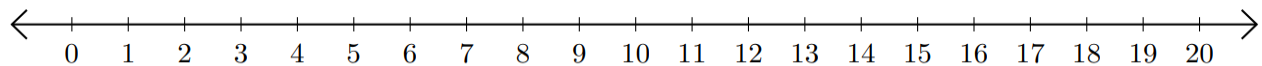
2) $8 - 5 =$ _____



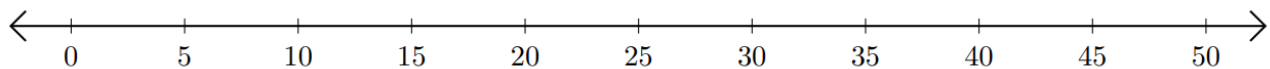
3) $13 + 2 =$ _____



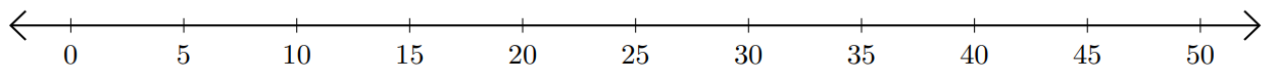
4) $16 - 10 =$ _____



5) $10 + 25 =$ _____



6) $50 - 25 =$ _____



HSEPREP.COM

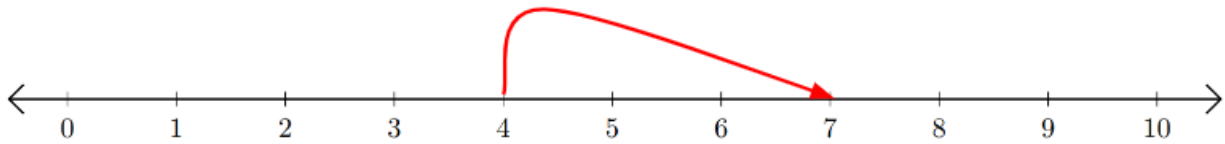
HSEPREP@GMAIL.COM

Number Line: Addition and Subtraction

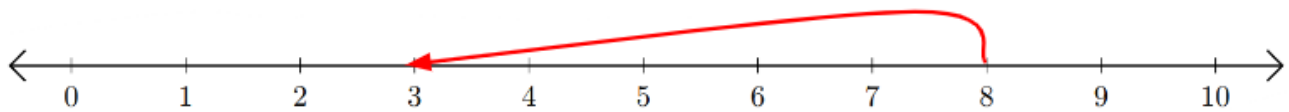
HSEPREP.COM

HSEPREP@GMAIL.COM


1) $4 + 3 = \underline{7}$



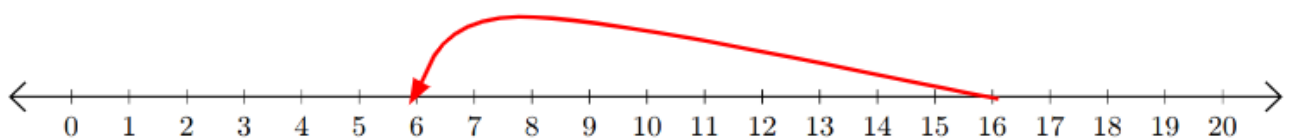
2) $8 - 5 = \underline{3}$



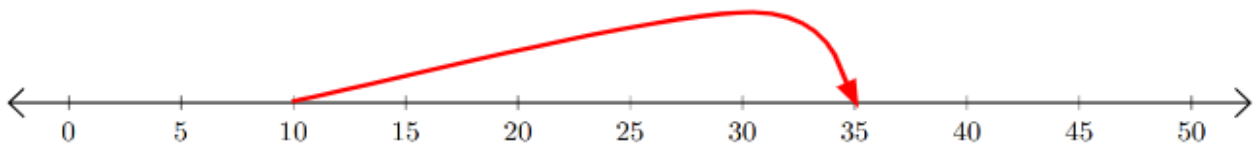
3) $13 + 2 = \underline{15}$



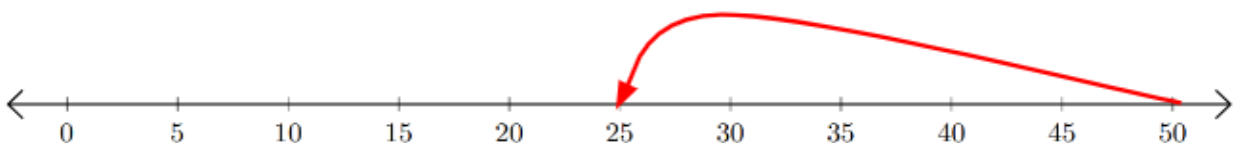
4) $16 - 10 = \underline{6}$



5) $10 + 25 = \underline{35}$



6) $50 - 25 = \underline{25}$



HSEPREP.COM

HSEPREP@GMAIL.COM