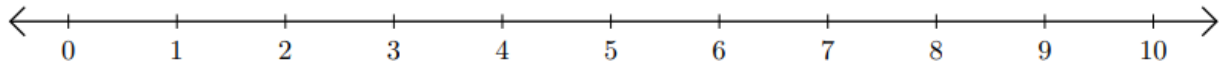


Number Line: Addition and Subtraction

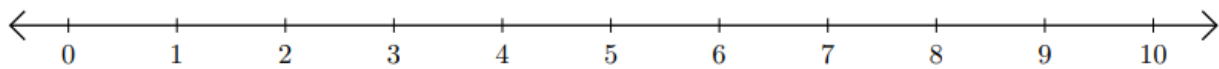
HSEPREP.COM

HSEPREP@GMAIL.COM

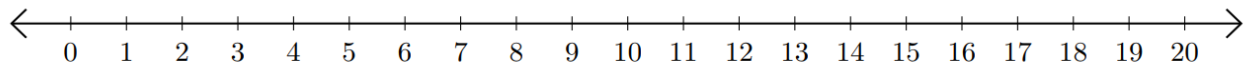
1) $1 + 5 =$ _____



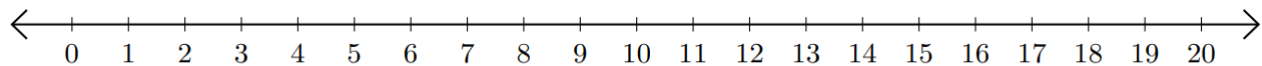
2) $10 - 3 =$ _____



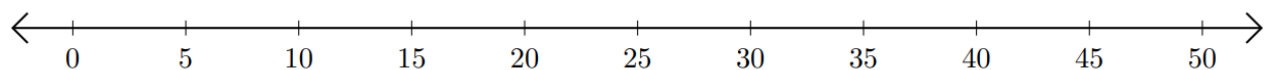
3) $4 + 14 =$ _____



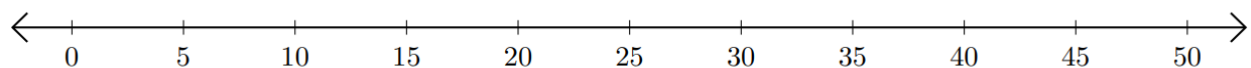
4) $18 - 15 =$ _____



5) $15 + 35 =$ _____



6) $30 - 20 =$ _____

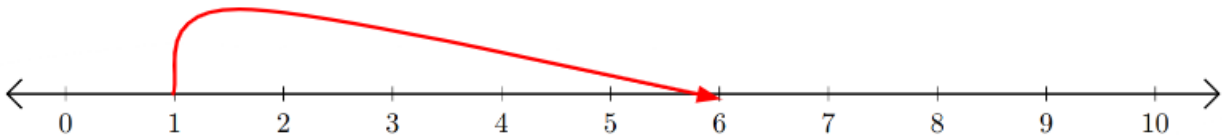


HSEPREP.COM

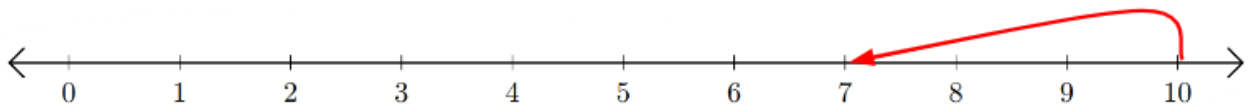
HSEPREP@GMAIL.COM

Number Line: Addition and Subtraction

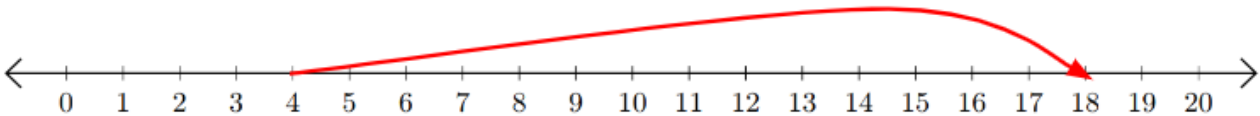
1) $1 + 5 = \underline{6}$



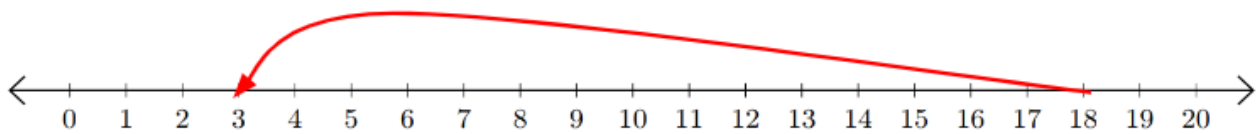
2) $10 - 3 = \underline{7}$



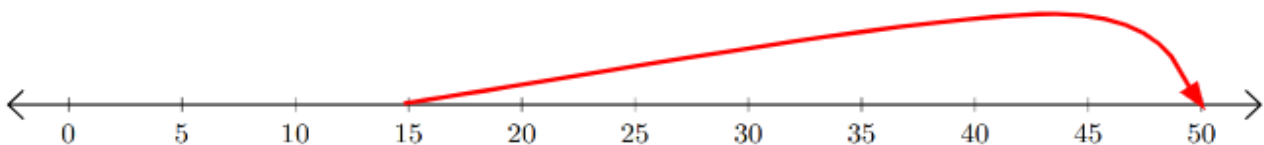
3) $4 + 14 = \underline{18}$



4) $18 - 15 = \underline{3}$



5) $15 + 35 = \underline{50}$



6) $30 - 20 = \underline{10}$

