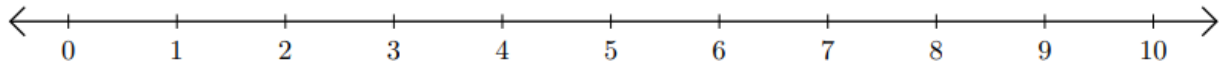


Number Line: Addition and Subtraction

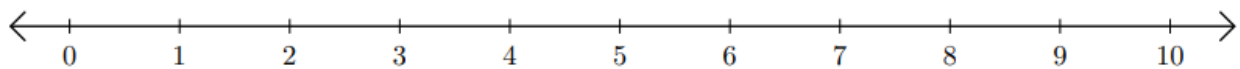
HSEPREP.COM

HSEPREP@GMAIL.COM

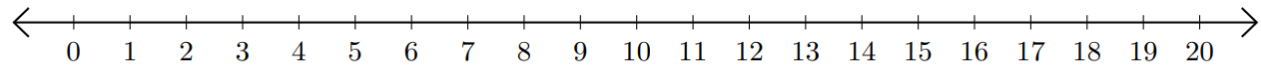
1) $4 + 5 =$ _____



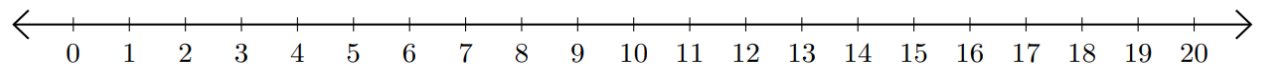
2) $10 - 8 =$ _____



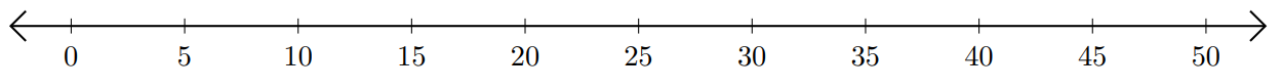
3) $19 + 1 =$ _____



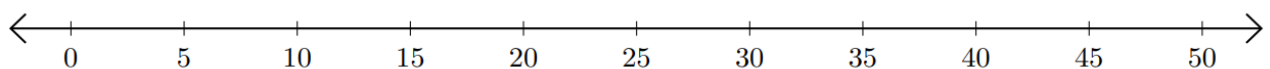
4) $16 - 10 =$ _____



5) $35 + 15 =$ _____



6) $30 - 5 =$ _____

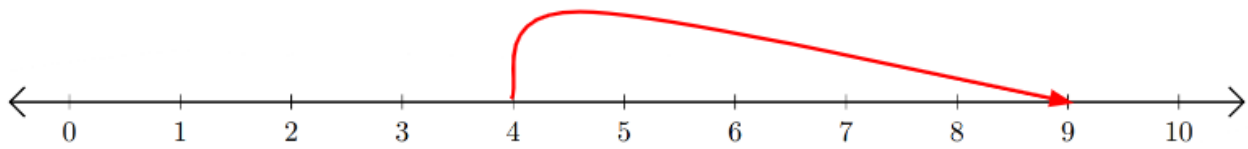


Number Line: Addition and Subtraction

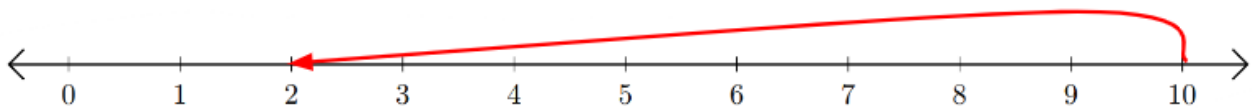
HSEPREP.COM

HSEPREP@GMAIL.COM

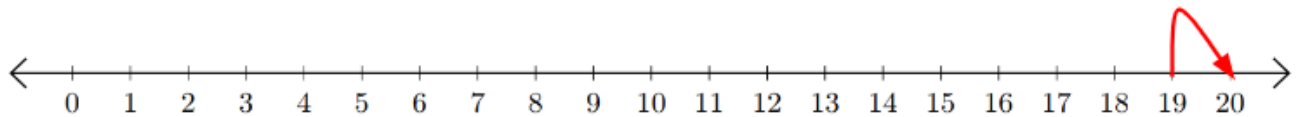
1) $4 + 5 = \underline{9}$



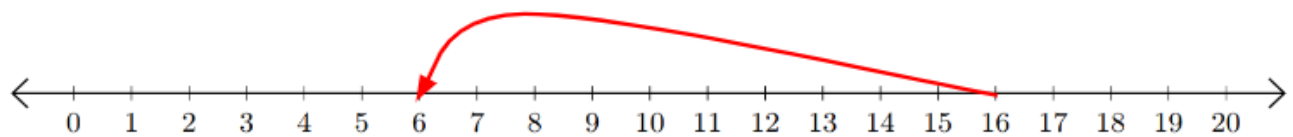
2) $10 - 8 = \underline{2}$



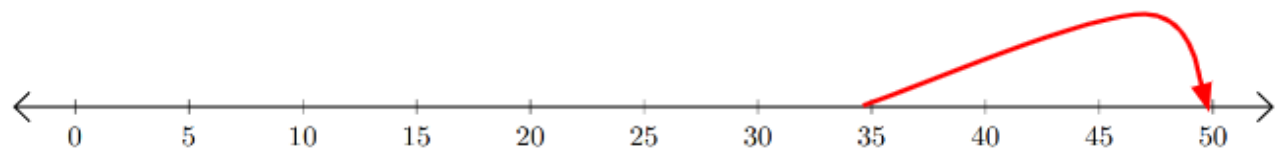
3) $19 + 1 = \underline{20}$



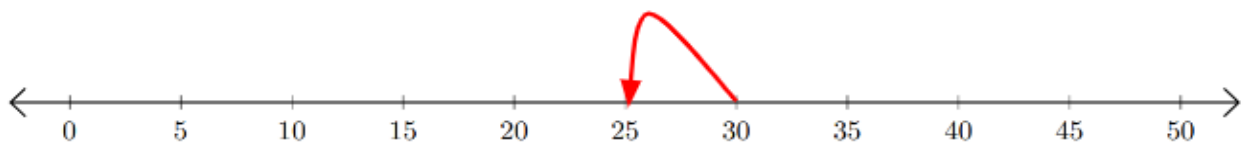
4) $16 - 10 = \underline{6}$



5) $35 + 15 = \underline{50}$



6) $30 - 5 = \underline{25}$



HSEPREP.COM

HSEPREP@GMAIL.COM