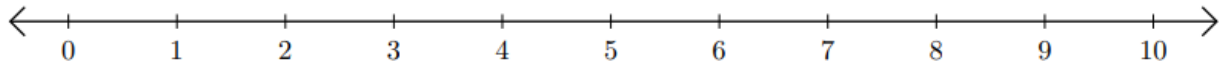


Number Line: Addition and Subtraction

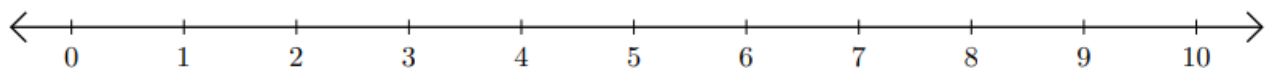
HSEPREP.COM

HSEPREP@GMAIL.COM

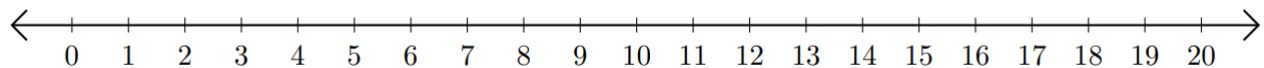
1) $9 + 1 =$ _____



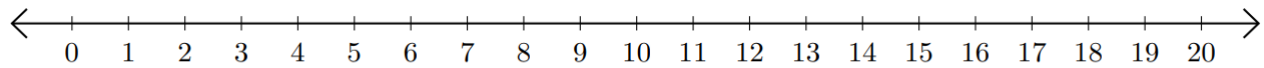
2) $7 - 5 =$ _____



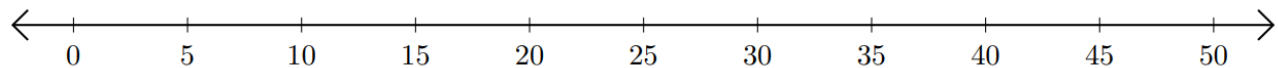
3) $16 + 3 =$ _____



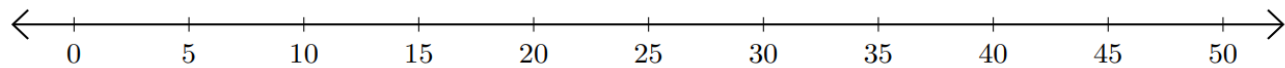
4) $12 - 8 =$ _____



5) $20 + 20 =$ _____



6) $50 - 15 =$ _____



HSEPREP.COM

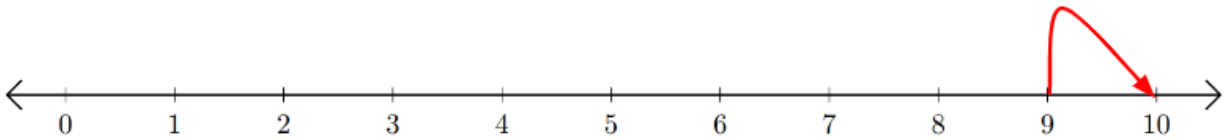
HSEPREP@GMAIL.COM

Number Line: Addition and Subtraction

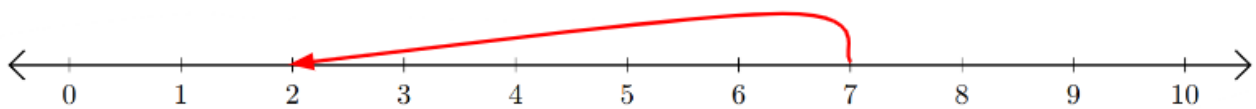
HSEPREP.COM

HSEPREP@GMAIL.COM

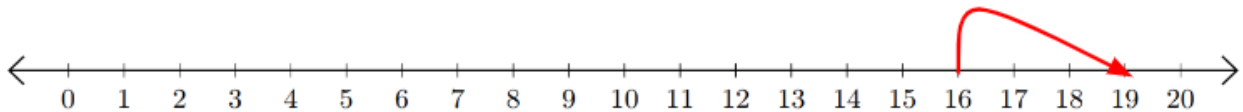
1) $9 + 1 = 10$



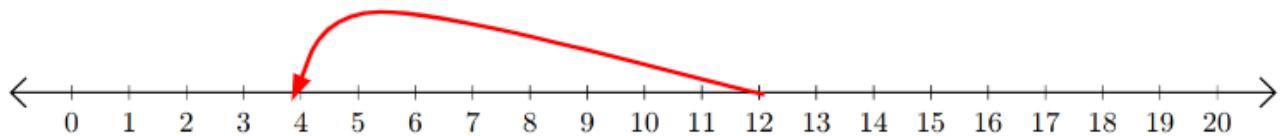
2) $7 - 5 = 2$



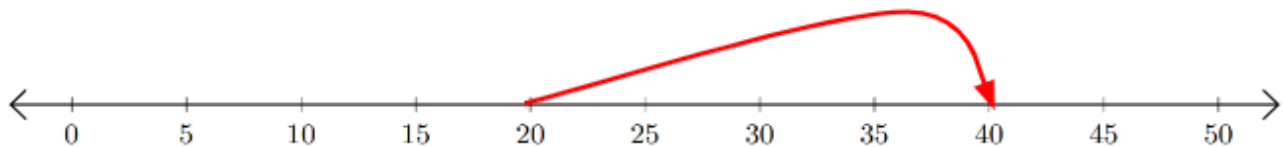
3) $16 + 3 = 19$



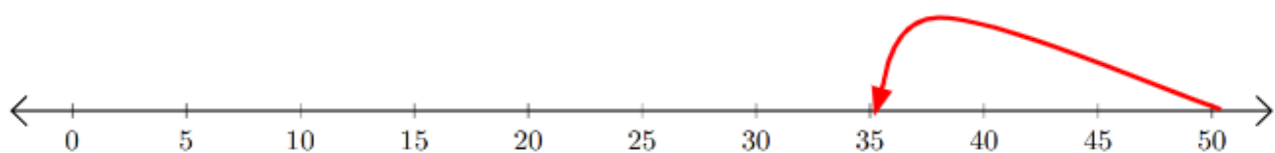
4) $12 - 8 = 4$



5) $20 + 20 = 40$



6) $50 - 15 = 35$



HSEPREP.COM

HSEPREP@GMAIL.COM