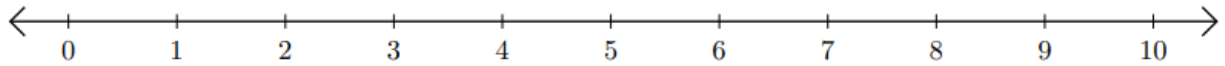


Number Line: Addition and Subtraction

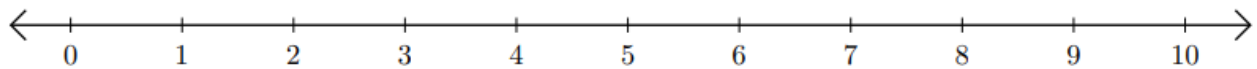
HSEPREP.COM

HSEPREP@GMAIL.COM

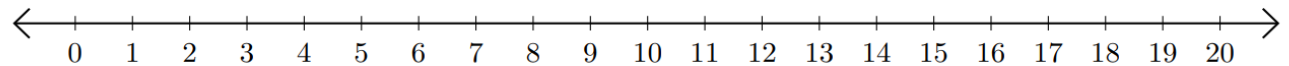
1) $6 + 4 =$ _____



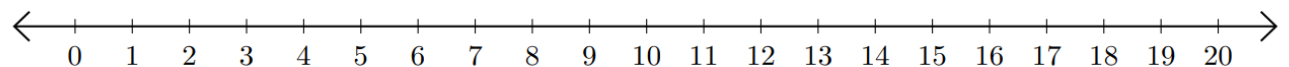
2) $10 - 3 =$ _____



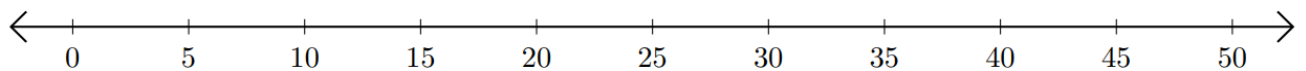
3) $13 + 2 =$ _____



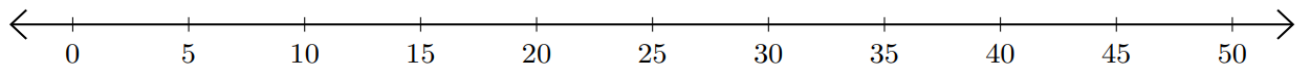
4) $19 - 18 =$ _____



5) $45 + 5 =$ _____



6) $35 - 30 =$ _____

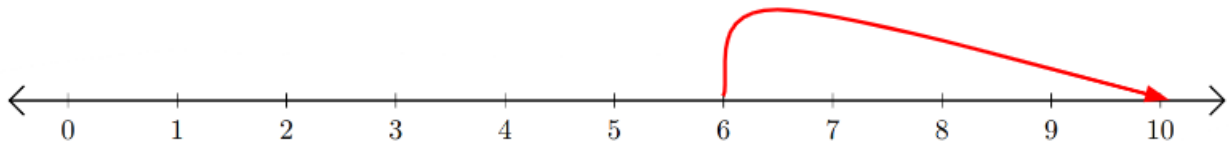


HSEPREP.COM

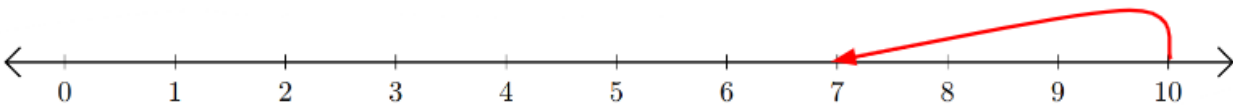
HSEPREP@GMAIL.COM

Number Line: Addition and Subtraction

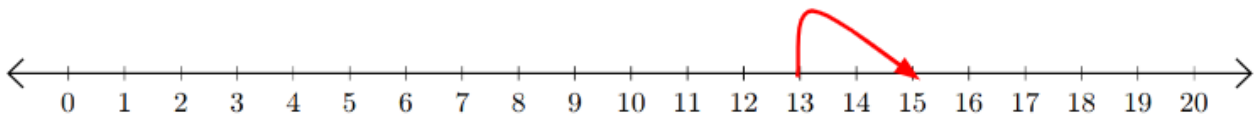
1) $6 + 4 = \underline{10}$



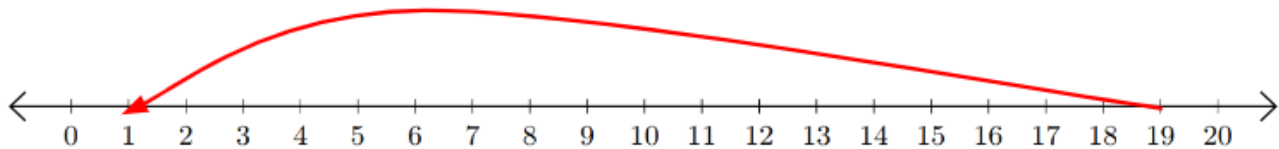
2) $10 - 3 = \underline{7}$



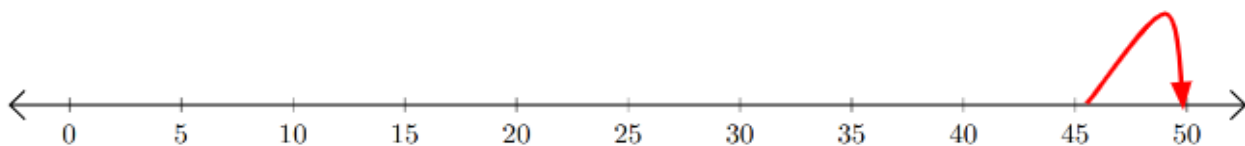
3) $13 + 2 = \underline{15}$



4) $19 - 18 = 1$



5) $45 + 5 = \underline{50}$



6) $35 - 30 = \underline{5}$

