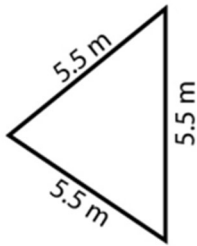
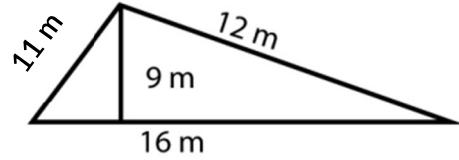


Area: Triángulos

1)



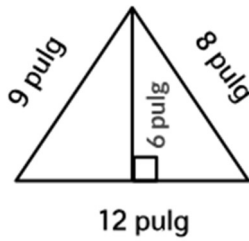
2)



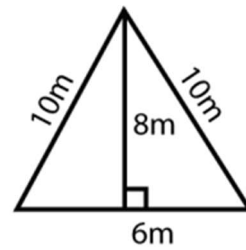
Area: _____

Area: _____

3)



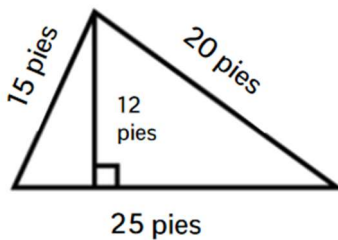
4)



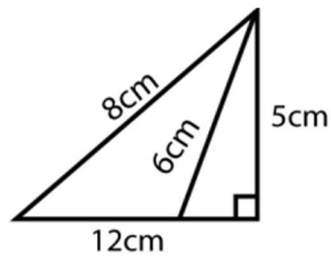
Area: _____

Area: _____

5)



6)

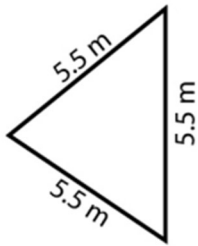


Area: _____

Area: _____

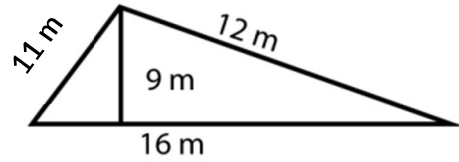
Area: Triángulos

1)



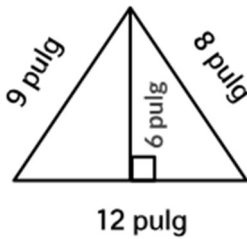
Area: 13.09 m²

2)



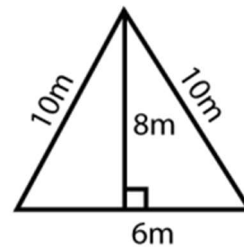
Area: 49 m²

3)



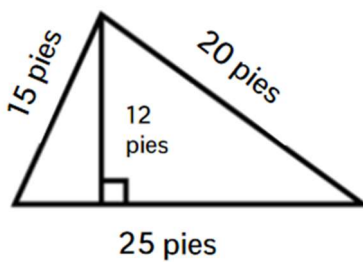
Area: 36 pulg²

4)



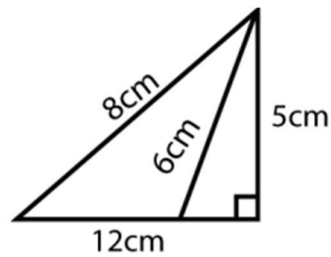
Area: 24 m²

5)



Area: 150 pies²

6)



Area: 30 cm²