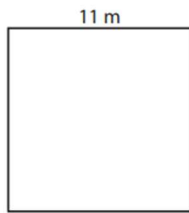


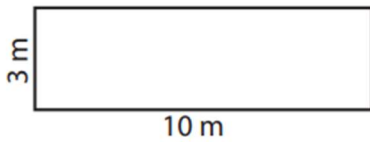
Area: Cuadriláteros

1)



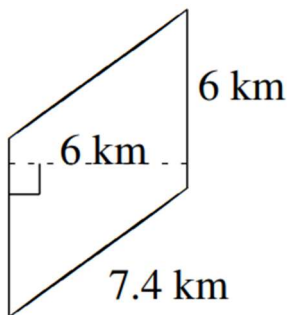
Area: _____

3)



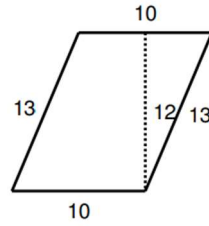
Area: _____

5)



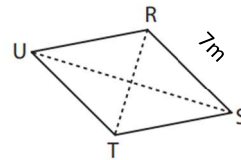
Area: _____

2)



Area: _____

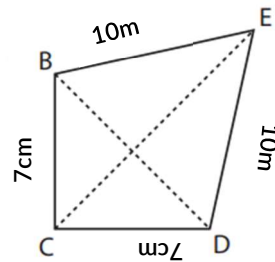
4)



RT = 10 m, US = 19 m

Area: _____

6)




BD = 8 m, CE = 12 m

Area: _____

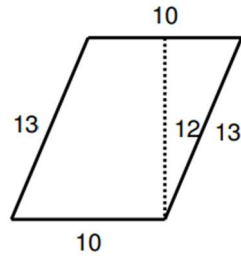
Area: Cuadriláteros

1)



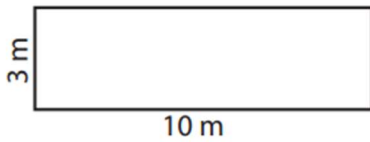
Area: 121 m²

2)



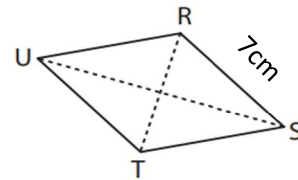
Area: 120 unit²

3)



Area: 30 m²

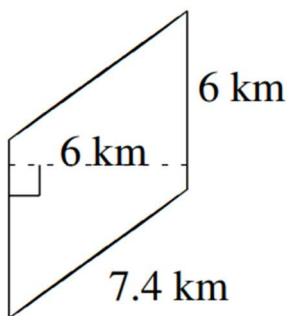
4)



RT = 10 cm, US = 19 cm

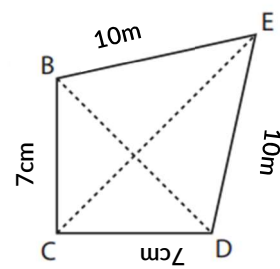
Area: 95 cm²

5)



Area: 36 km²

6)



BD = 8 m, CE = 12 m

Area: 48 m²