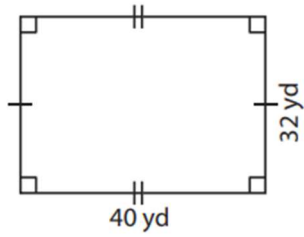


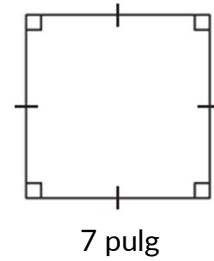
Area: Cuadriláteros

1)



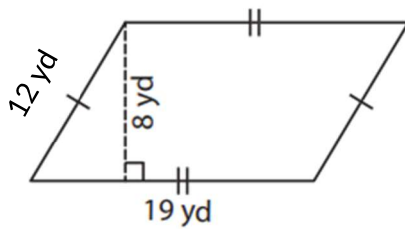
Area: _____

2)



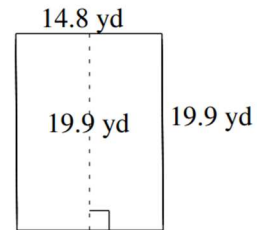
Area: _____

3)



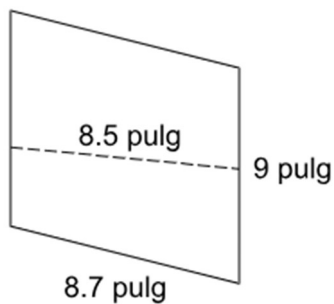
Area: _____

4)



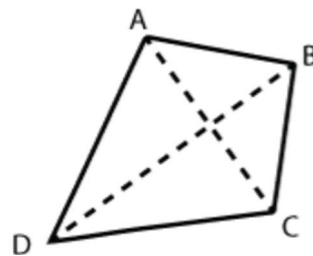
Area: _____

5)



Area: _____

6)



AC = 6 pies, BD = 10 pies

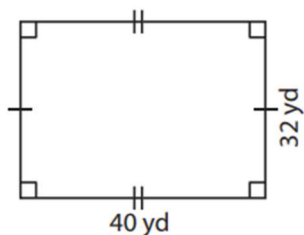
AD = 7 pies, DC = 6 pies,

BC = 5 pies, AB = 4 pies

Area: _____

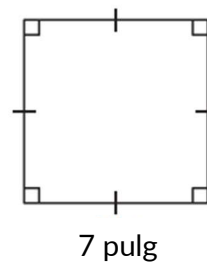
Area: Cuadriláteros

1)



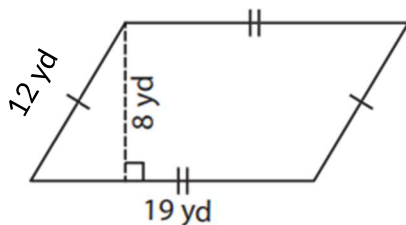
Area: 1280 yd²

2)



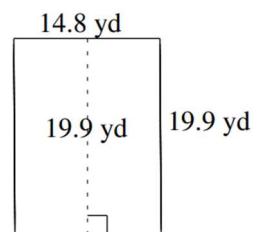
Area: 49 pulg²

3)



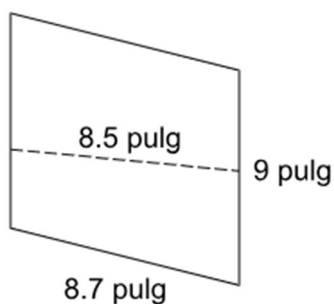
Area: 152 yd²

4)



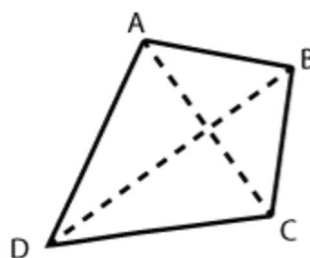
Area: 294.52 yd²

5)



Area: 76.5 pulg²

6)



AC = 6 pies, BD = 10 pies

AD = 7 pies, DC = 6 pies,

BC = 5 pies, AB = 4 pies

Area: 30 pies²