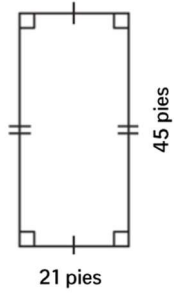


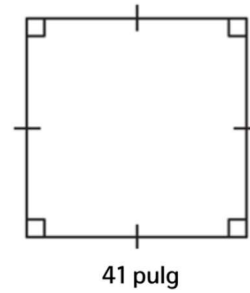
Area: Cuadriláteros

1)



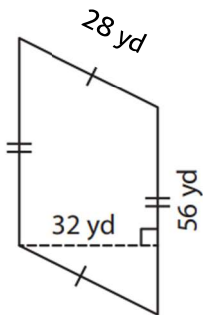
Area: _____

2)



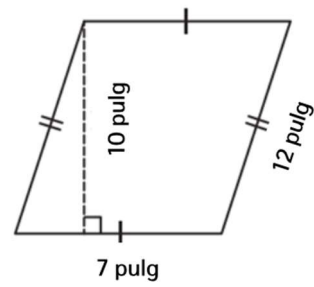
Area: _____

3)



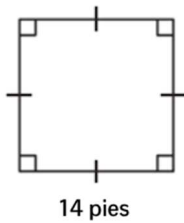
Area: _____

4)



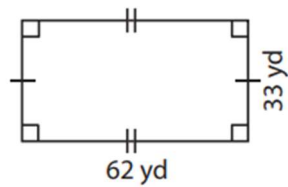
Area: _____

5)



Area: _____

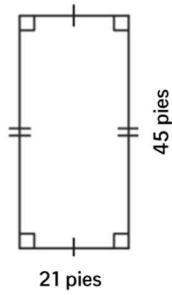
6)



Area: _____

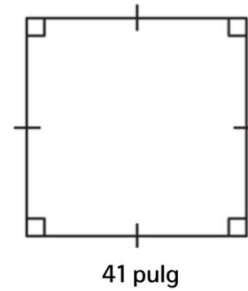
Area: Cuadriláteros

1)



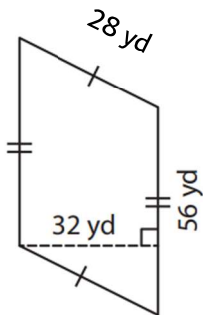
Area: 945 pies²

2)



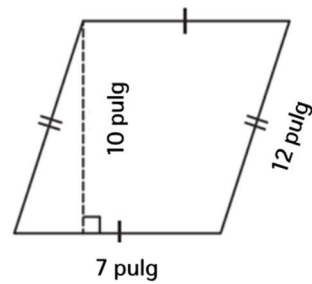
Area: 1,681 pulg²

3)



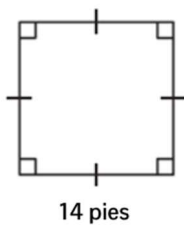
Area: 1792 yd²

4)



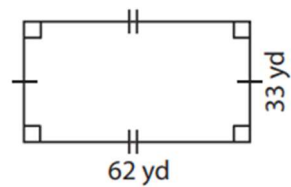
Area: 70 pulg²

5)



Area: 196 pies²

6)



Area: 2406 yd²